

Hello, brand new Second Formers!

Welcome to Second Form! We have assembled a special summer packet to keep your skills sharp for 2nd grade. You need to bring back your completed packet on the first day of school.

Second Graders, here is your mission this summer!

- ❑ **Log your reading** at least 15 times in June, 15 times in July, and 15 times in August. Read at least 20 minutes each of those days. You only need to log the minutes, not the titles. This is the 1st section in this binder.

- ❑ **Each month you will have two writing assignments** of at least 4 sentences. There is also an extra page for free writing! This is the 2nd section in this folder.

- ❑ Complete your **writing word work** at your own pace over the summer. This is the 3rd section in this folder.

- ❑ Complete your **math review pages** at your own pace over the summer. This is the 4th section in this folder.


- ❑ **Turn in your WHOLE, COMPLETED FOLDER** to your Second Form teacher on the first day of school, **Wednesday, September 6th!**

See you soon!

Your Second Form Teachers :)

1st Section: Reading Log

What to do: **Log your reading** at least 15 times in June, 15 times in July, and 15 times in August. Read at least 20 minutes each of those days. You only need to log the minutes, not the titles.



June

2023

reading log

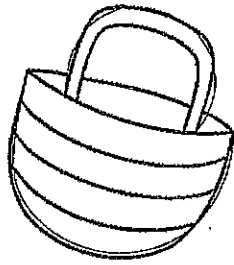

Sunday	Monday	Tuesday	Wednesday	Thursday	Friday	Saturday
				1	2	3
4	5	6	7	8	9	10
11	12	13	14	15	16	17
18	19	20	21	22	23	24
25	26	27	28	29	30	

Child's Name: _____

Parent Signature: _____

Monthly Goal:

Please log how many minutes you read nightly.



July

2023

reading log


Sunday	Monday	Tuesday	Wednesday	Thursday	Friday	Saturday
						1
2	3	4	5	6	7	8
9	10	11	12	13	14	15
16	17	18	19	20	21	22
23	24	25	26	27	28	29
30	31					

Child's Name: _____

Parent Signature: _____

Monthly Goal:

Please log how many minutes you read nightly.



August

2023

reading log

Sunday	Monday	Tuesday	Wednesday	Thursday	Friday	Saturday
		1	2	3	4	5
6	7	8	9	10	11	12
13	14	15	16	17	18	19
20	21	22	23	24	25	26
27	28	29	30	31		

Child's Name: _____

Parent Signature: _____

Monthly Goal:


Please log how many minutes you read nightly.

2nd Section: Writing Assignments

What to do: **Each month you will have two writing assignments** of at least 4 sentences. Answer the prompt in 4 or more sentences. There are also extra pages for free writing if you would like to write more.


Prompt #1: Would you like to be a character in the book you are reading? Why or why not?

Lined writing area for the response.



Prompt #5: Think of something you are really good at. Now write a paragraph telling someone how to do that activity. Pretend the person reading your guide has never done it before!

Lined writing area consisting of approximately 20 horizontal lines for text entry.



Free Writing Pages

Write what you would like to write about! This is optional.

[Illegible text consisting of multiple lines of a document, possibly a list or table, with very faint and low-contrast characters.]

[The page contains approximately 25 lines of extremely faint, illegible text, likely a scan of a document with low contrast or significant noise.]

[The page contains approximately 25 lines of extremely faint, illegible text, likely bleed-through from the reverse side of the paper. The text is too light to transcribe accurately.]

3rd Section:

Writing Word Work

What to do: Complete your **writing word work** at your own pace over the summer.

SENTENCE OR FRAGMENT?

5
GRAMMAR

Circle the COMPLETE sentences.
Cross out the incomplete sentence FRAGMENTS.

HINT: There are FIVE complete sentences and SEVEN fragments.

The kitten is playing.	At the swimming pool.	On the white porch.
Kyle turned off the TV.	Do you like waterslides?	Drippy ice cream.
Fran's favorite shoes.	Fran's shoes are on the porch.	The huge red beach ball.
Do you have shorts?	Outside by the big barn.	Laughing and playing at the beach.

NOUN SEARCH!

7
GRAMMAR

Choose a book and find 14 different nouns (person, place, thing, or animal). Write the nouns in the space below.

Book Title:

Author:

1. _____

2. _____

3. _____

4. _____

5. _____

6. _____

7. _____

8. _____

9. _____


10. _____

11. _____


12. _____

13. _____

14. _____



PROPER NOUNS



Read the words in each box.

Circle the word or phrase in each box that is a proper noun and needs a capital letter.

Hint: Names of people, months, and days of the week are all proper nouns

sam doll car	map monday marbles	beach august sand
susie surfboard saltwater	june waterpark slide	lemonade driving friday
chipmunk simon singing	sunday water ice cube	miss swanson teacher vacation

Write a sentence that includes two proper nouns:

VERB SEARCH!

22
GRAMMAR

Choose a book and find 14 different verbs (action words). Write the verbs in the space below.

Book Title:

Author:

1. _____

2. _____

3. _____

4. _____

5. _____

6. _____

7. _____

8. _____

9. _____


10. _____

11. _____

12. _____

13. _____

14. _____



PROPER NOUNS

24
GRAMMAR

Read the words in each box.

Circle the word or phrase in each box that is a proper noun and needs a capital letter.

Hint: Names of people, months, and days of the week are all proper nouns

monday money monkey	soda sara songs	diner december days
fins face friday	maria markers math	ape adam airplane
camping carol car	thursday things table	school socks september

Write a sentence that includes two proper nouns:

SENTENCE OR FRAGMENT?

34
GRAMMAR

Circle the COMPLETE sentences.

Cross out the incomplete sentence FRAGMENTS.

HINT: There are FIVE complete sentences and SEVEN fragments.

Soft sand in the ocean.	They are swimming.	Sarah loves strawberries.
The seashell is white.	Very cold water in the pool.	Do you like popsicles?
Tennis balls on the table?	She runs in the race.	The biggest sandcastle.
Can we ride bikes?	Laying in the hot sun.	Do you like to play soccer?

ADJECTIVE SEARCH!

Choose a book and find 14 different adjectives (describing words). Write the adjectives in the space below.

Book Title:

Author:

1. _____

2. _____

3. _____

4. _____

5. _____

6. _____

7. _____

8. _____

9. _____


10. _____

11. _____

12. _____

13. _____

14. _____



ALIKE AND DIFFERENT



Explain how the meaning of the two words are similar and different. Use complete sentences..

dog cat

These two things are similar because...

--

table chair

These two things are similar because...

--

towel blanket

These two things are similar because...

--

flower tree

These two things are similar because...

--

Name _____

Use your best handwriting to copy the words.

world

two

hours


Use your best handwriting to copy the sentences below.

The world record for longest handshake is held by two brothers.
They shook hands for 42 hours and 35 minutes. Amazing!

Wow! * Wow! * Wow! * Wow! * Wow! * Wow! * Wow! * Wow! * Wow!

Handwriting practice lines with dashed midlines and solid top/bottom lines. The word 'world' is written on the first line, and 'two' is written on the second line. The rest of the lines are blank for practice.

Tip: All uppercase letters should touch the top and bottom lines.



Extra Wacky!
The world record for a mustache is 14-feet long.

Name _____

Use your best handwriting to copy the words.

more used kids

Use your best handwriting to copy the sentences below.


Tricycles were invented more than 200 years ago.
The first ones were used by grown-ups rather than kids.

Wow! * Wow! * Wow! * Wow! * Wow! * Wow! * Wow! * Wow!

more used kids
Tricycles were invented more than 200 years ago.
The first ones were used by grown-ups rather than kids.
Wow! * Wow! * Wow! * Wow! * Wow! * Wow! * Wow! * Wow!

Practice Page 27

Tip: Try to make all of your letters stand up straight.



Extra Wacky!
There are 1 billion bikes on earth.

Name _____

Use your best handwriting to copy the words.

time

any

their

Use your best handwriting to copy the sentences below.

Elephants spend the longest time pregnant of any mammal.

Female elephants carry their babies for two whole years!

Wow! * Wow! * Wow! * Wow! * Wow! * Wow! * Wow! * Wow! * Wow! * Wow!

time any their

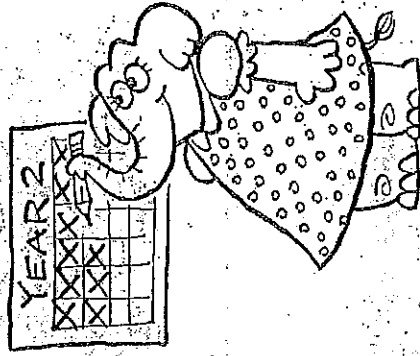
time any their

time any their

time any their

Practice Page
32

Tip: You can use a finger to practice writing your letters on your friend's back.



Extra Wacky!

A newborn giraffe can stand up after one hour.

Name _____

Use your best handwriting to copy the words.

may simply tickle

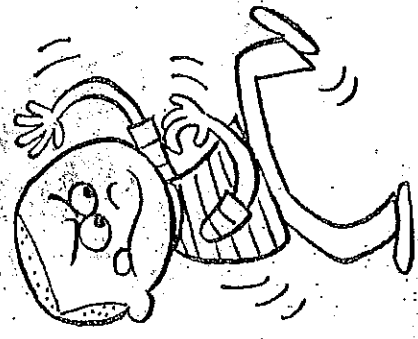
Use your best handwriting to copy the sentences below.

You may be a little ticklish or a lot ticklish. But either way, it is simply not possible to tickle yourself.

Wow! * Wow! * Wow! * Wow! * Wow! * Wow! * Wow! * Wow! * Wow! * Wow!

Handwriting practice lines consisting of multiple sets of three horizontal lines (top, middle dashed, bottom) for copying the text above.

Tip: Make sure your pencil is nice and sharp before you begin writing.



Extra Wacky!
Very few people can wiggle their ears.

4th Section:

Math Review

What to do: Complete your **math review pages** at your own pace over the summer.

Name: _____

Date: _____

Practice 4 Subtraction with Regrouping

Regroup.

1. $27 = 1 \text{ ten } \underline{\hspace{2cm}} \text{ ones}$

2. $15 = 0 \text{ tens } \underline{\hspace{2cm}} \text{ ones}$

3. $30 = 2 \text{ tens } \underline{\hspace{2cm}} \text{ ones}$

Subtract.

4.
$$\begin{array}{r} 23 \\ - \quad 6 \\ \hline \end{array}$$

5.
$$\begin{array}{r} 24 \\ - \quad 8 \\ \hline \end{array}$$

6.
$$\begin{array}{r} 33 \\ - \quad 5 \\ \hline \end{array}$$

7.
$$\begin{array}{r} 36 \\ - \quad 9 \\ \hline \end{array}$$

8.
$$\begin{array}{r} 25 \\ - 16 \\ \hline \end{array}$$

9.
$$\begin{array}{r} 20 \\ - 18 \\ \hline \end{array}$$

Name: _____

Smile & Solve

ADDITION & SUBTRACTION WITH AND WITHOUT REGROUPING

$$\begin{array}{r} 14 \\ + 32 \\ \hline \end{array}$$

$$\begin{array}{r} 81 \\ - 36 \\ \hline \end{array}$$

$$\begin{array}{r} 55 \\ - 13 \\ \hline \end{array}$$

$$\begin{array}{r} 25 \\ + 13 \\ \hline \end{array}$$

$$\begin{array}{r} 85 \\ - 33 \\ \hline \end{array}$$

$$\begin{array}{r} 95 \\ - 13 \\ \hline \end{array}$$

$$\begin{array}{r} 15 \\ + 38 \\ \hline \end{array}$$

$$\begin{array}{r} 41 \\ + 23 \\ \hline \end{array}$$

$$\begin{array}{r} 53 \\ - 12 \\ \hline \end{array}$$

$$\begin{array}{r} 14 \\ + 33 \\ \hline \end{array}$$

$$\begin{array}{r} 47 \\ + 12 \\ \hline \end{array}$$

$$\begin{array}{r} 88 \\ - 39 \\ \hline \end{array}$$

$$\begin{array}{r} 14 \\ + 22 \\ \hline \end{array}$$

$$\begin{array}{r} 16 \\ + 31 \\ \hline \end{array}$$

$$\begin{array}{r} 88 \\ - 36 \\ \hline \end{array}$$



$$\begin{array}{r} 28 \\ - 14 \\ \hline \end{array}$$

$$\begin{array}{r} 77 \\ + 15 \\ \hline \end{array}$$

$$\begin{array}{r} 95 \\ - 32 \\ \hline \end{array}$$

$$\begin{array}{r} 25 \\ + 17 \\ \hline \end{array}$$

$$\begin{array}{r} 91 \\ - 46 \\ \hline \end{array}$$




5. Fill in the box.

= 1 hundred 2 tens 0 ones

- (A) 120 (B) 100 (C) 102 (D) 12

6. Which of the following shows the time on the clock?



- (A) 6:00 (B) 12:30 (C) 6:30 (D) 5:30

7. Subtract 59 from 83.

- (A) 34 (B) 24 (C) 36 (D) 26


8. 10 more than 76 is _____.

- (A) 56 (B) 66 (C) 77 (D) 86

9. 65 comes just before _____.

- (A) 55 (B) 64 (C) 66 (D) 75

10.



3 tens and 6 ones is the same as _____.

- (A) 8 (B) 11 (C) 36 (D) 83

11. Look at the number pattern.
Which number comes next?

28, 31, 34, 37, 40 _____

- (A) 31 (B) 41 (C) 43 (D) 50

12. 10 more than 65 is _____.

- (A) 55 (B) 56 (C) 85 (D) 75

13. Add 16 to 57.

- (A) 13 (B) 63 (C) 73 (D) 83

14. Find the missing number.

_____ 15, 25, 35, 45

- (A) 0 (B) 5 (C) 10 (D) 55


Cumulative Review

for Chapters 10 to 13

Concepts and Skills


Fill in the blanks.

Write *heavier than*, *lighter than*, or *as heavy as*.



1. The book is _____ the ball.
2. The doll is _____ the book.
3. The ball is _____ the doll.

Fill in the blanks.



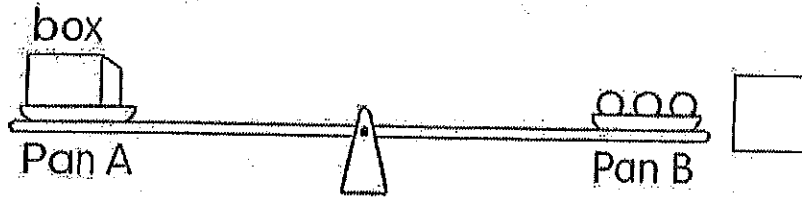
The _____ is lighter than the carrot.

The _____ is heavier than the carrot.

So, the tomato is lighter than the pineapple.

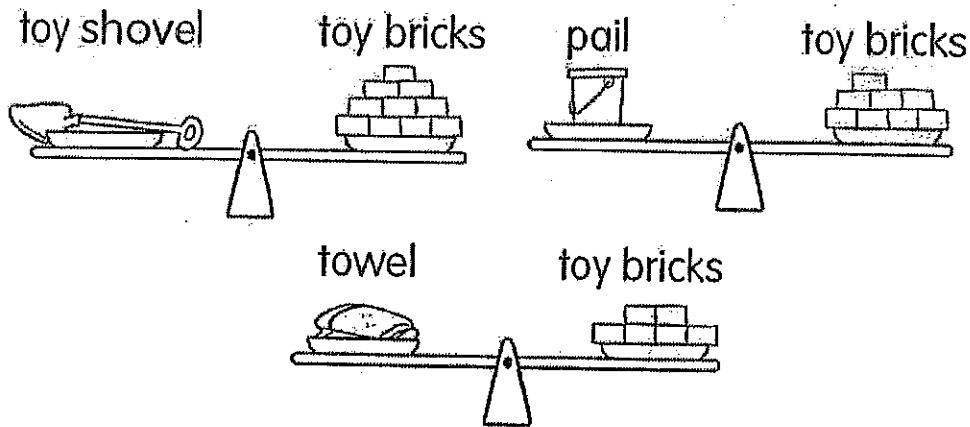
Fill in the blanks.

1 ○ stands for 1 unit.



11. The weight of the box is _____ units.
12. Add 1 marble to Pan A.
Draw ↓ or ↑ in the to show if Pan B goes up or down.

Fill in the blanks.



13. The weight of the toy shovel is about _____ toy bricks.
14. Order the objects from heaviest to lightest.

_____ heaviest _____

15. Subtract.

$$\begin{array}{r} 45 \\ -36 \\ \hline \end{array}$$


- (A) 9 (B) 11 (C) 19 (D) 81

16. Add mentally.

$$15 + 24 = \underline{\hspace{2cm}}$$

- (A) 7 (B) 13 (C) 39 (D) 35

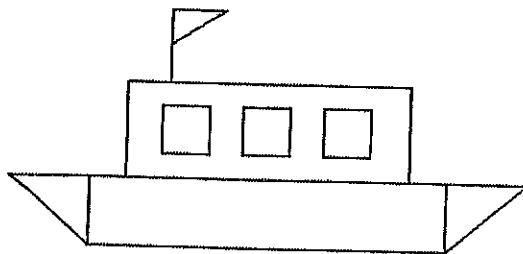
17.



There are _____ stickers in all.

- (A) 6 (B) 12 (C) 24 (D) 30


18. There are _____ squares in the figure.




- (A) 3 (B) 4 (C) 5 (D) 6

Name _____


Mixed Practice #4




3	0
-2	4




3	7
+5	7




9	5
-2	0




5	5
-1	4




4	4
+2	7




6	5
+1	0




3	3
+2	0




4	0
-1	2




2	3
+2	0




7	0
-3	0



2	9
+2	9



8	0
-5	5



Fill in the blanks.

36. 2 less than 25 is _____.

37. _____ is 3 more than 18.

38. $24 =$ _____ tens 4 ones

39. $18 =$ 1 ten _____ ones

Add or subtract.

40. $21 + 7 =$ _____

41. $24 + 10 =$ _____

42. $27 - 3 =$ _____


43. $38 - 15 =$ _____

44. $6 + 3 + 7 =$ _____

45. $9 + 8 + 5 =$ _____

Name: _____

Date: _____



The pencil is about _____ long.

- (A) 8 (B) 2 (C) 6 (D) 4

Short Answer

Write the number in words.

20. 11 _____ 21. 87 _____


Write the number.

22. fifty-four _____

23. one hundred nineteen _____

Look at the pictures.

Then fill in the blanks.



24. Order the bags from lightest to heaviest.

_____ _____ _____
lightest

Name: _____

Date: _____

$$\begin{array}{r} 46. \quad 23 \\ + \quad 16 \\ \hline \end{array}$$

$$\begin{array}{r} 47. \quad 29 \\ + \quad 11 \\ \hline \end{array}$$

$$\begin{array}{r} 48. \quad 14 \\ + \quad 17 \\ \hline \end{array}$$

$$\begin{array}{r} 49. \quad 18 \\ + \quad 17 \\ \hline \end{array}$$

$$\begin{array}{r} 50. \quad 36 \\ - \quad 24 \\ \hline \end{array}$$

$$\begin{array}{r} 51. \quad 36 \\ - \quad 18 \\ \hline \end{array}$$

$$\begin{array}{r} 52. \quad 21 \\ - \quad 17 \\ \hline \end{array}$$

$$\begin{array}{r} 53. \quad 32 \\ - \quad 15 \\ \hline \end{array}$$

Name: _____

Carrot Crunch and Solve

ADDITION & SUBTRACTION WITH AND WITHOUT REGROUPING

$$\begin{array}{r} 86 \\ - 35 \\ \hline \end{array}$$

$$\begin{array}{r} 28 \\ + 16 \\ \hline \end{array}$$

$$\begin{array}{r} 18 \\ + 45 \\ \hline \end{array}$$

$$\begin{array}{r} 83 \\ - 51 \\ \hline \end{array}$$

$$\begin{array}{r} 62 \\ + 15 \\ \hline \end{array}$$

$$\begin{array}{r} 94 \\ - 13 \\ \hline \end{array}$$

$$\begin{array}{r} 16 \\ + 52 \\ \hline \end{array}$$

$$\begin{array}{r} 34 \\ + 16 \\ \hline \end{array}$$

$$\begin{array}{r} 22 \\ - 17 \\ \hline \end{array}$$

$$\begin{array}{r} 85 \\ - 53 \\ \hline \end{array}$$

$$\begin{array}{r} 77 \\ - 52 \\ \hline \end{array}$$

$$\begin{array}{r} 38 \\ + 29 \\ \hline \end{array}$$

$$\begin{array}{r} 45 \\ + 17 \\ \hline \end{array}$$

$$\begin{array}{r} 37 \\ + 14 \\ \hline \end{array}$$

$$\begin{array}{r} 93 \\ - 26 \\ \hline \end{array}$$



$$\begin{array}{r} 12 \\ + 57 \\ \hline \end{array}$$

$$\begin{array}{r} 84 \\ - 39 \\ \hline \end{array}$$

$$\begin{array}{r} 52 \\ + 16 \\ \hline \end{array}$$

$$\begin{array}{r} 99 \\ - 37 \\ \hline \end{array}$$

$$\begin{array}{r} 81 \\ - 45 \\ \hline \end{array}$$



Problem Solving

Solve.

54. Jamal has 20 stamps.
Michelle has 4 fewer stamps than Jamal.
How many stamps does Michelle have?

Michelle has _____ stamps.

55. Nate blows up 30 balloons for his birthday party.
Nate blows up 6 fewer balloons than Miguel.
How many balloons does Miguel blow up?


Miguel blows up _____ balloons.

56. Rose buys 3 sets of hairclips.
The first set has 3 pink hairclips.
The second set has 8 blue hairclips.
The third set has 4 white hairclips.
How many hairclips are there in all?


There are _____ hairclips in all.

Name _____


Mixed Practice #5




4	9
<u>+2</u>	<u>9</u>




6	0
<u>-3</u>	<u>2</u>




6	6
<u>-3</u>	<u>3</u>




5	5
<u>+2</u>	<u>4</u>




6	3
<u>-1</u>	<u>6</u>




3	7
<u>+2</u>	<u>3</u>




7	4
<u>-6</u>	<u>2</u>




4	5
<u>+5</u>	<u>4</u>




9	9
<u>-1</u>	<u>2</u>




5	9
<u>+2</u>	<u>3</u>



1	6
<u>+2</u>	<u>2</u>



4	3
<u>-3</u>	<u>5</u>

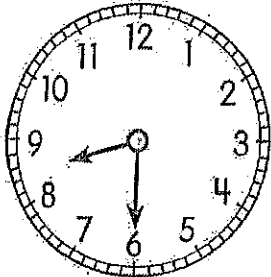


Name: _____

Date: _____

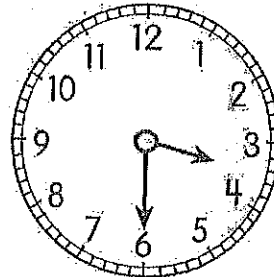
Write the time.

14.



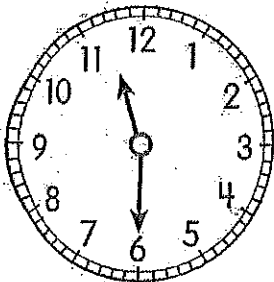
_____ : _____

15.



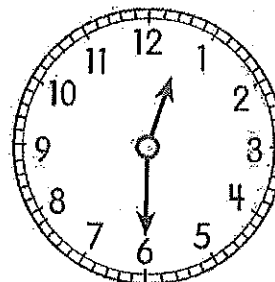
_____ : _____

16.



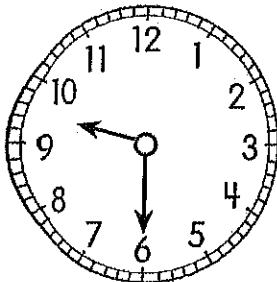
_____ : _____

17.



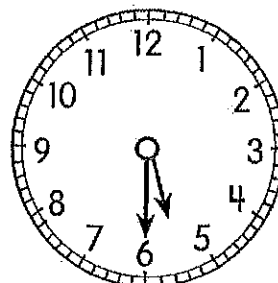
_____ : _____

18.




_____ : _____

19.






_____ : _____

Ten families live on the same street.
 Every family has one pet.
 The picture shows their pets.



Complete the tally chart to show the pet data.
 Then answer the questions.

39.

Kinds of Pets	Tally	Number
Hamster 		
Cat 		
Bird 		

- How many pets are there in all? _____
- Which pet has the greatest number? _____

Name: _____

Date: _____

Lesson 4 Adding and Subtracting Money

Add.

1.



$$15\text{¢} + 50\text{¢} = \underline{\hspace{2cm}}\text{¢}$$

2.



$$\underline{\hspace{2cm}} + \underline{\hspace{2cm}} = \underline{\hspace{2cm}}$$

3.



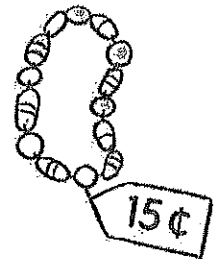
$$\underline{\hspace{2cm}} + \underline{\hspace{2cm}} = \underline{\hspace{2cm}}$$

Name: _____

Date: _____

Solve.

17. Ria has 50¢.
She buys a bracelet and a necklace.
How much money does she have left?



She has _____ left.

18. Tom buys the items shown.
How much does he spend in all?



He spends _____ in all.

Name: _____

Squirrely Solutions

ADDITION & SUBTRACTION WITH AND WITHOUT REGROUPING

$$\begin{array}{r} 34 \\ - 13 \\ \hline \end{array}$$

$$\begin{array}{r} 17 \\ + 45 \\ \hline \end{array}$$

$$\begin{array}{r} 81 \\ - 42 \\ \hline \end{array}$$

$$\begin{array}{r} 66 \\ + 13 \\ \hline \end{array}$$

$$\begin{array}{r} 92 \\ - 41 \\ \hline \end{array}$$

$$\begin{array}{r} 68 \\ - 19 \\ \hline \end{array}$$

$$\begin{array}{r} 25 \\ + 33 \\ \hline \end{array}$$

$$\begin{array}{r} 72 \\ - 22 \\ \hline \end{array}$$

$$\begin{array}{r} 63 \\ - 28 \\ \hline \end{array}$$

$$\begin{array}{r} 48 \\ - 23 \\ \hline \end{array}$$

$$\begin{array}{r} 56 \\ + 29 \\ \hline \end{array}$$

$$\begin{array}{r} 83 \\ + 15 \\ \hline \end{array}$$

$$\begin{array}{r} 22 \\ + 39 \\ \hline \end{array}$$

$$\begin{array}{r} 17 \\ + 35 \\ \hline \end{array}$$

$$\begin{array}{r} 72 \\ - 53 \\ \hline \end{array}$$

$$\begin{array}{r} 88 \\ - 45 \\ \hline \end{array}$$

$$\begin{array}{r} 17 \\ + 23 \\ \hline \end{array}$$

$$\begin{array}{r} 52 \\ + 38 \\ \hline \end{array}$$


$$\begin{array}{r} 22 \\ + 15 \\ \hline \end{array}$$

$$\begin{array}{r} 85 \\ - 13 \\ \hline \end{array}$$



Name _____

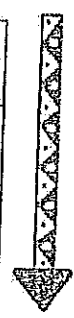
Mixed Practice #8



9	7
-5	3



6	7
+2	8



9	0
-1	8



1	7
+3	7



5	0
+4	2



1	6
+4	6



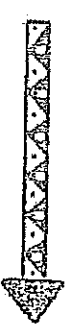
7	0
-6	5



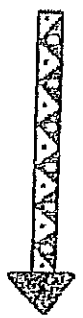
6	0
+1	0



3	0
+6	9



8	6
-4	0



8	8
-2	0




9	4
-1	8




Name _____


Mixed Practice #9




4	6
-2	7




1	0
+6	4




2	4
+2	5




9	9
-1	0




2	9
+4	5




7	0
-1	1




4	9
-2	5




5	7
+2	4




7	2
-4	1




6	0
+2	7



3	6
+1	7



6	1
-1	4



Count on to find the value.

18.



Add.

19.



$$25¢ + 17¢ = \underline{\hspace{2cm}} ¢$$

Complete.

20.



$$45¢ - 15¢ = \underline{\hspace{2cm}} ¢$$

21. Subtract 18¢ from 90¢

$$\underline{\hspace{2cm}} - \underline{\hspace{2cm}} = \underline{\hspace{2cm}} ¢$$

Problem Solving

Solve.

22. Draw the least number of coins needed to make 64¢.